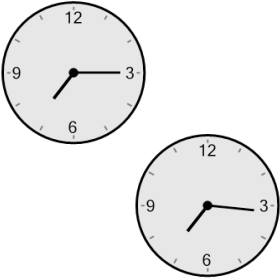




Time - Elapsed - Two Clocks To Minutes - Quarter Hours

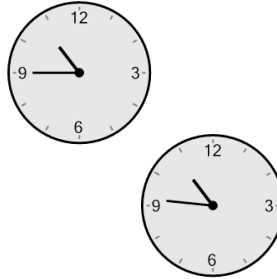


1 How many minutes later is the second clock?



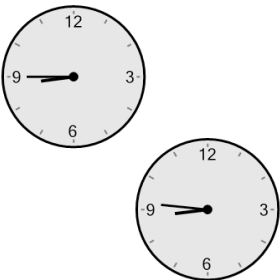
- | | |
|--------------|---------------|
| A
89 mins | B
46 mins |
| C
91 mins | D
106 mins |
| E
29 mins | F
1 min |

2 How many minutes later is the second clock?



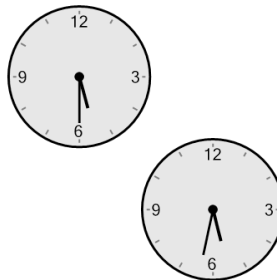
- | | |
|--------------|--------------|
| A
31 mins | B
29 mins |
| C
1 min | D
16 mins |
| E
46 mins | F
91 mins |

3 How many minutes later is the second clock?



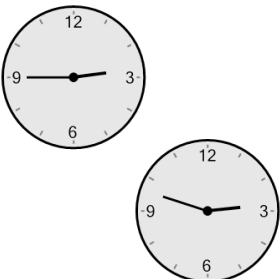
- | | |
|--------------|--------------|
| A
1 min | B
46 mins |
| C
59 mins | D
74 mins |
| E
91 mins | F
14 mins |

4 How many minutes later is the second clock?




- | | |
|--------------|--------------|
| A
13 mins | B
43 mins |
| C
2 mins | D
88 mins |
| E
17 mins | F
28 mins |

5 How many minutes later is the second clock?



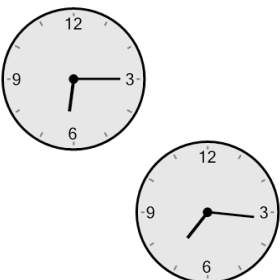
- | | |
|--------------|---------------|
| A
27 mins | B
78 mins |
| C
87 mins | D
3 mins |
| E
42 mins | F
102 mins |

6 How many minutes later is the second clock?




- | | |
|--------------|--------------|
| A
27 mins | B
63 mins |
| C
33 mins | D
87 mins |
| E
3 mins | F
12 mins |

7 How many minutes later is the second clock?



- | | |
|---------------|--------------|
| A
31 mins | B
16 mins |
| C
14 mins | D
76 mins |
| E
121 mins | F
61 mins |

8 How many minutes later is the second clock?



- | | |
|---------------|---------------|
| A
108 mins | B
33 mins |
| C
138 mins | D
153 mins |
| E
12 mins | F
63 mins |