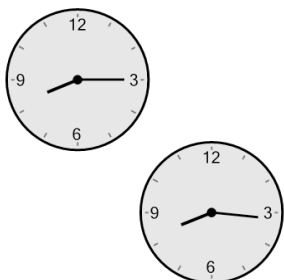



Time - Elapsed - Two Clocks To Minutes - Quarter Hours

1 How many minutes later is the second clock?



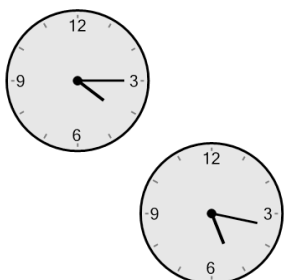
A	74 mins	B	61 mins
C	16 mins	D	31 mins
E	1 min	F	14 mins

2 How many minutes later is the second clock?



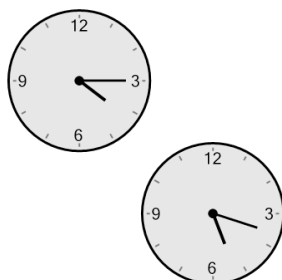
A	31 mins	B	46 mins
C	1 min	D	29 mins
E	106 mins	F	74 mins

3 How many minutes later is the second clock?



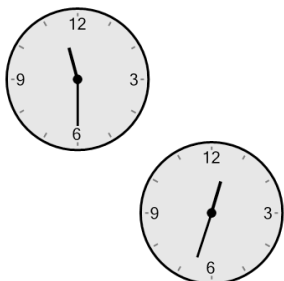
A	137 mins	B	13 mins
C	107 mins	D	92 mins
E	28 mins	F	62 mins

4 How many minutes later is the second clock?



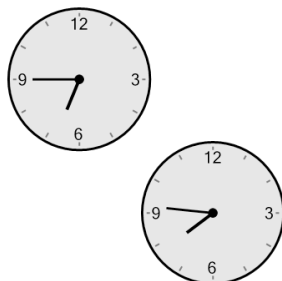
A	42 mins	B	168 mins
C	153 mins	D	123 mins
E	63 mins	F	18 mins

5 How many minutes later is the second clock?



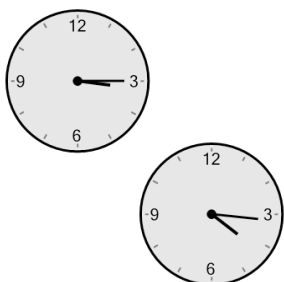
A	27 mins	B	63 mins
C	78 mins	D	168 mins
E	123 mins	F	42 mins

6 How many minutes later is the second clock?



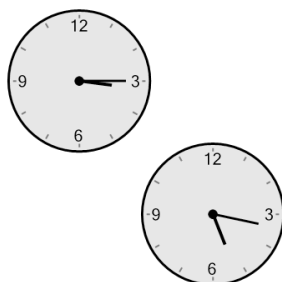
A	166 mins	B	106 mins
C	76 mins	D	14 mins
E	1 min	F	61 mins

7 How many minutes later is the second clock?



A	76 mins	B	166 mins
C	121 mins	D	44 mins
E	61 mins	F	46 mins

8 How many minutes later is the second clock?



A	167 mins	B	197 mins
C	137 mins	D	122 mins
E	62 mins	F	152 mins