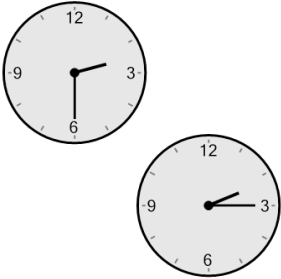



## Time - Elapsed Negative - Two Clocks To Hours & Minutes - Five Minutes

**1** How many hours and minutes earlier is the second clock?




- A 15 mins
- B 45 mins
- C 30 mins
- D 1 hr 15 mins
- E 1 hr 30 mins
- F 1 hr

**2** How many hours and minutes earlier is the second clock?



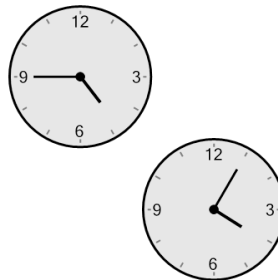
- A 1 hr 15 mins
- B 30 mins
- C 2 hrs
- D 1 hr 30 mins
- E 45 mins
- F 15 mins

**3** How many hours and minutes earlier is the second clock?



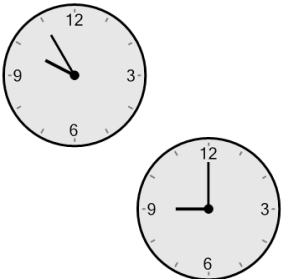
- |           |           |
|-----------|-----------|
| A 50 mins | B 20 mins |
| C 10 mins | D 25 mins |
| E 40 mins | F 35 mins |

**4** How many hours and minutes earlier is the second clock?




- A 1 hr 10 mins
- B 40 mins
- C 55 mins
- D 20 mins
- E 50 mins
- F 1 hr 5 mins

**5** How many hours and minutes earlier is the second clock?




- A 1 hr 10 mins
- B 25 mins
- C 20 mins
- D 1 hr 55 mins
- E 55 mins
- F 2 hrs 40 mins

**6** How many hours and minutes earlier is the second clock?




- A 40 mins
- B 1 hr 50 mins
- C 2 hrs 35 mins
- D 50 mins
- E 35 mins
- F 55 mins

**7** How many hours and minutes earlier is the second clock?



- A 1 hr 25 mins
- B 1 hr 50 mins
- C 25 mins
- D 5 mins
- E 1 hr 40 mins
- F 20 mins

**8** How many hours and minutes earlier is the second clock?



- A 35 mins
- B 1 hr 20 mins
- C 5 mins
- D 1 hr 50 mins
- E 1 hr 25 mins
- F 10 mins