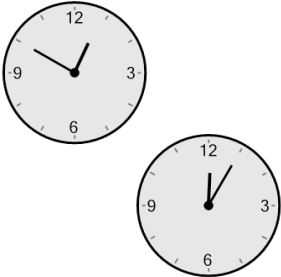





## Time - Elapsed Negative - Two Clocks To Hours & Minutes - Five Minutes

**1** How many hours and minutes earlier is the second clock?




- A 2 hrs 30 mins
- B 0 hr
- C 45 mins
- D 1 hr 30 mins
- E 30 mins
- F 2 hrs

**2** How many hours and minutes earlier is the second clock?




- A 1 hr 50 mins
- B 1 hr 20 mins
- C 5 mins
- D 10 mins
- E 50 mins
- F 20 mins

**3** How many hours and minutes earlier is the second clock?



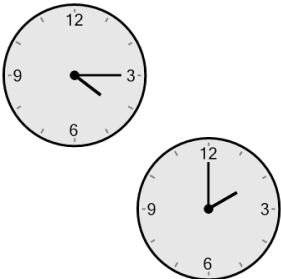
- A 1 hr 35 mins
- B 2 hrs 5 mins
- C 2 hrs 50 mins
- D 20 mins
- E 2 hrs 35 mins
- F 1 hr 20 mins

**4** How many hours and minutes earlier is the second clock?




- A 1 hr 5 mins
- B 55 mins
- C 50 mins
- D 25 mins
- E 20 mins
- F 1 hr 20 mins

**5** How many hours and minutes earlier is the second clock?



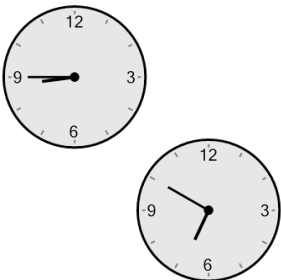
- A 1 hr 30 mins
- B 4 hrs
- C 2 hrs 15 mins
- D 3 hrs 45 mins
- E 2 hrs
- F 1 hr 15 mins

**6** How many hours and minutes earlier is the second clock?




- A 30 mins
- B 45 mins
- C 2 hrs
- D 1 hr
- E 1 hr 15 mins
- F 0 hr

**7** How many hours and minutes earlier is the second clock?



- A 1 hr 55 mins
- B 2 hrs 40 mins
- C 1 hr 40 mins
- D 1 hr 10 mins
- E 55 mins
- F 1 hr 25 mins

**8** How many hours and minutes earlier is the second clock?



- A 1 hr 15 mins
- B 2 hrs 30 mins
- C 2 hrs
- D 2 hrs 15 mins
- E 3 hrs 15 mins
- F 1 hr 30 mins