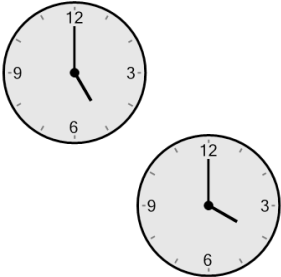




Time - Elapsed Negative - Two Clocks To Hours & Minutes - Full Hours

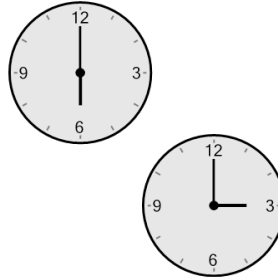


1 How many hours and minutes earlier is the second clock?



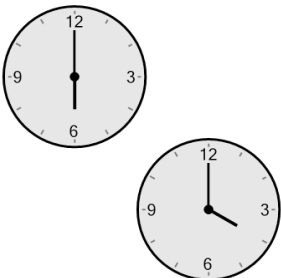
- A 15 mins
- B 2 hrs 45 mins
- C 1 hr
- D 45 mins
- E 30 mins
- F 0 hr

2 How many hours and minutes earlier is the second clock?



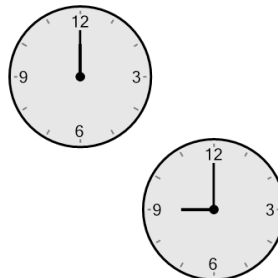
- A 3 hrs 45 mins
- B 6 hrs
- C 2 hrs
- D 1 hr 30 mins
- E 3 hrs
- F 4 hrs 15 mins

3 How many hours and minutes earlier is the second clock?



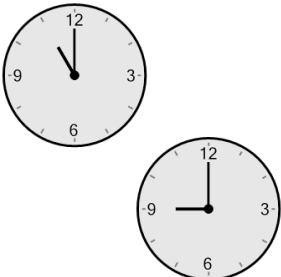
- A 3 hrs 30 mins
- B 5 hrs
- C 2 hrs
- D 3 hrs
- E 3 hrs 45 mins
- F 0 hr

4 How many hours and minutes earlier is the second clock?




- A 4 hrs
- B 3 hrs
- C 3 hrs 30 mins
- D 6 hrs
- E 2 hrs
- F 2 hrs 45 mins

5 How many hours and minutes earlier is the second clock?




- A 0 hr
- B 2 hrs 15 mins
- C 1 hr
- D 1 hr 30 mins
- E 2 hrs
- F 2 hrs 45 mins

6 How many hours and minutes earlier is the second clock?




- | | | |
|-------|-------|-------|
| A | B | C |
| 1 hr | 3 hrs | 6 hrs |
| D | E | F |
| 2 hrs | 4 hrs | 5 hrs |

7 How many hours and minutes earlier is the second clock?



- A 3 hrs 45 mins
- B 2 hrs 15 mins
- C 1 hr
- D 2 hrs
- E 3 hrs 15 mins
- F 0 hr

8 How many hours and minutes earlier is the second clock?



- A 2 hrs 45 mins
- B 1 hr 30 mins
- C 2 hrs
- D 0 hr
- E 1 hr
- F 45 mins