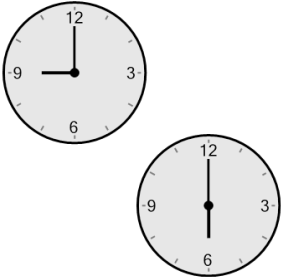




## Time - Elapsed Negative - Two Clocks To Hours & Minutes - Full Hours




**1** How many hours and minutes earlier is the second clock?



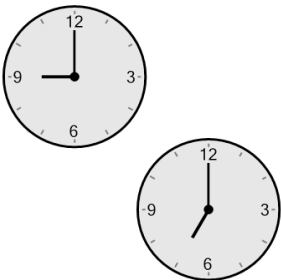
- |   |               |
|---|---------------|
| A | 4 hrs 30 mins |
| B | 1 hr          |
| C | 5 hrs         |
| D | 2 hrs 15 mins |
| E | 3 hrs         |
| F | 2 hrs         |

**2** How many hours and minutes earlier is the second clock?




- |   |              |
|---|--------------|
| A | 4 hrs        |
| B | 1 hr         |
| C | 15 mins      |
| D | 1 hr 45 mins |
| E | 30 mins      |
| F | 3 hrs        |

**3** How many hours and minutes earlier is the second clock?



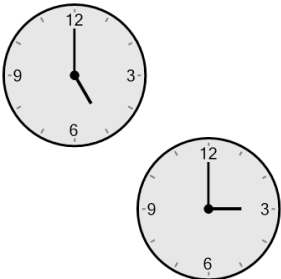
- |       |       |       |
|-------|-------|-------|
| A     | B     | C     |
| 5 hrs | 2 hrs | 3 hrs |
| D     | E     | F     |
| 1 hr  | 4 hrs | 0 hr  |

**4** How many hours and minutes earlier is the second clock?




- |   |              |
|---|--------------|
| A | 3 hrs        |
| B | 4 hrs        |
| C | 6 hrs        |
| D | 5 hrs        |
| E | 1 hr 30 mins |
| F | 2 hrs        |

**5** How many hours and minutes earlier is the second clock?



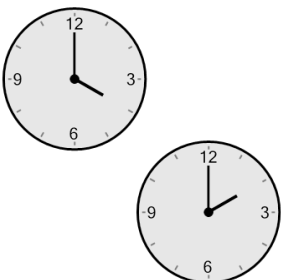
- |   |               |
|---|---------------|
| A | 30 mins       |
| B | 1 hr          |
| C | 3 hrs 45 mins |
| D | 3 hrs         |
| E | 2 hrs         |
| F | 4 hrs         |

**6** How many hours and minutes earlier is the second clock?




- |         |       |
|---------|-------|
| A       | B     |
| 45 mins | 0 hr  |
| C       | D     |
| 4 hrs   | 2 hrs |
| E       | F     |
| 15 mins | 1 hr  |

**7** How many hours and minutes earlier is the second clock?



- |   |               |
|---|---------------|
| A | 5 hrs         |
| B | 2 hrs 30 mins |
| C | 3 hrs         |
| D | 1 hr          |
| E | 30 mins       |
| F | 2 hrs         |

**8** How many hours and minutes earlier is the second clock?



- |   |               |
|---|---------------|
| A | 4 hrs         |
| B | 1 hr 15 mins  |
| C | 3 hrs         |
| D | 2 hrs         |
| E | 5 hrs         |
| F | 4 hrs 30 mins |