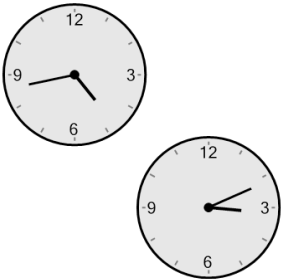




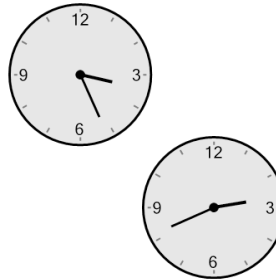
Time - Elapsed Negative - Two Clocks To Hours & Minutes - One Minutes

1 How many hours and minutes earlier is the second clock?




- A 47 mins
- B 17 mins
- C 1 hr 32 mins
- D 2 hrs 17 mins
- E 1 hr 2 mins
- F 1 hr 17 mins

2 How many hours and minutes earlier is the second clock?




- A 30 mins
- B 1 hr 15 mins
- C 2 hrs 15 mins
- D 45 mins
- E 0 hr
- F 1 hr 45 mins

3 How many hours and minutes earlier is the second clock?




- A 1 hr 18 mins
- B 48 mins
- C 57 mins
- D 1 hr 42 mins
- E 3 mins
- F 33 mins

4 How many hours and minutes earlier is the second clock?




- A 7 mins
- B 22 mins
- C 52 mins
- D 38 mins
- E 2 hrs 22 mins
- F 1 hr 22 mins

5 How many hours and minutes earlier is the second clock?




- A 1 hr 26 mins
- B 34 mins
- C 4 mins
- D 19 mins
- E 49 mins
- F 1 hr 41 mins

6 How many hours and minutes earlier is the second clock?




- A 1 hr 39 mins
- B 1 hr 51 mins
- C 24 mins
- D 54 mins
- E 1 hr 21 mins
- F 6 mins

7 How many hours and minutes earlier is the second clock?



- A 29 mins
- B 1 hr 31 mins
- C 44 mins
- D 31 mins
- E 46 mins
- F 1 hr 1 min

8 How many hours and minutes earlier is the second clock?



- A 2 hrs 21 mins
- B 1 hr 51 mins
- C 2 hrs 36 mins
- D 51 mins
- E 1 hr 6 mins
- F 1 hr 36 mins