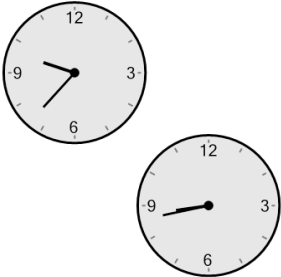



Time - Elapsed Negative - Two Clocks To Hours & Minutes - One Minutes

1 How many hours and minutes earlier is the second clock?




- A 54 mins
- B 36 mins
- C 1 hr 39 mins
- D 2 hrs 24 mins
- E 6 mins
- F 1 hr 24 mins

2 How many hours and minutes earlier is the second clock?




- A 3 hrs 20 mins
- B 35 mins
- C 50 mins
- D 20 mins
- E 1 hr 35 mins
- F 2 hrs 50 mins

3 How many hours and minutes earlier is the second clock?



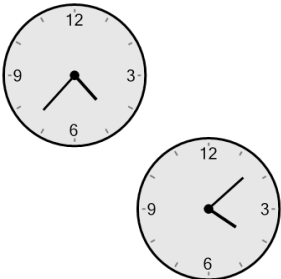
- A 1 hr 18 mins
- B 27 mins
- C 2 hrs 12 mins
- D 1 hr 42 mins
- E 1 hr 12 mins
- F 1 hr 57 mins

4 How many hours and minutes earlier is the second clock?




- A 13 mins
- B 1 hr 43 mins
- C 43 mins
- D 17 mins
- E 47 mins
- F 58 mins

5 How many hours and minutes earlier is the second clock?



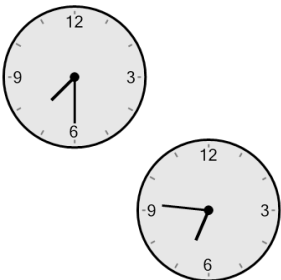
- A 16 mins
- B 1 hr 44 mins
- C 29 mins
- D 1 hr 29 mins
- E 44 mins
- F 46 mins

6 How many hours and minutes earlier is the second clock?




- A 1 hr 54 mins
- B 9 mins
- C 1 hr 24 mins
- D 39 mins
- E 1 hr 6 mins
- F 1 hr 9 mins

7 How many hours and minutes earlier is the second clock?



- A 2 hrs 14 mins
- B 29 mins
- C 44 mins
- D 1 hr 14 mins
- E 14 mins
- F 1 min

8 How many hours and minutes earlier is the second clock?



- A 1 hr 25 mins
- B 55 mins
- C 1 hr 35 mins
- D 20 mins
- E 40 mins
- F 5 mins