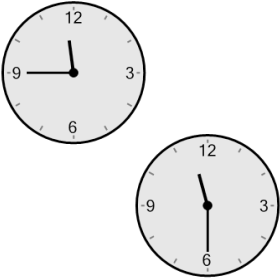




Time - Elapsed Negative - Two Clocks To Hours & Minutes - Quarter Hours

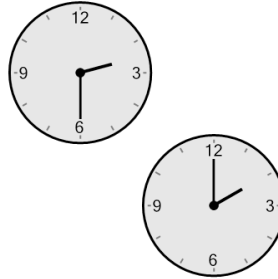


1 How many hours and minutes earlier is the second clock?



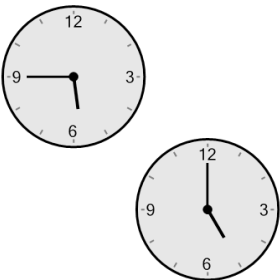
- A 1 hr 45 mins
- B 15 mins
- C 1 hr 30 mins
- D 1 hr 15 mins
- E 30 mins
- F 0 hr

2 How many hours and minutes earlier is the second clock?



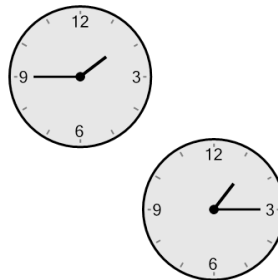
- A 30 mins
- B 15 mins
- C 1 hr 15 mins
- D 1 hr 30 mins
- E 1 hr
- F 45 mins

3 How many hours and minutes earlier is the second clock?



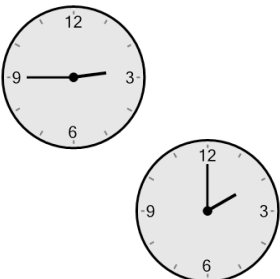
- A 2 hrs 30 mins
- B 2 hrs 15 mins
- C 45 mins
- D 1 hr 30 mins
- E 30 mins
- F 0 hr

4 How many hours and minutes earlier is the second clock?




- A 1 hr 45 mins
- B 30 mins
- C 0 hr
- D 1 hr 15 mins
- E 15 mins
- F 45 mins

5 How many hours and minutes earlier is the second clock?



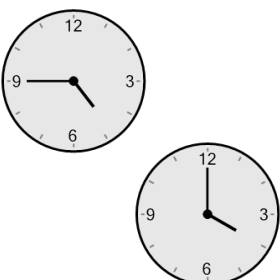
- A 30 mins
- B 1 hr 15 mins
- C 15 mins
- D 1 hr 30 mins
- E 2 hrs 30 mins
- F 45 mins

6 How many hours and minutes earlier is the second clock?




- A 1 hr 15 mins
- B 15 mins
- C 0 hr
- D 45 mins
- E 1 hr
- F 30 mins

7 How many hours and minutes earlier is the second clock?



- A 30 mins
- B 2 hrs 15 mins
- C 1 hr
- D 15 mins
- E 1 hr 45 mins
- F 45 mins

8 How many hours and minutes earlier is the second clock?



- A 1 hr 30 mins
- B 45 mins
- C 1 hr
- D 1 hr 15 mins
- E 15 mins
- F 1 hr 45 mins