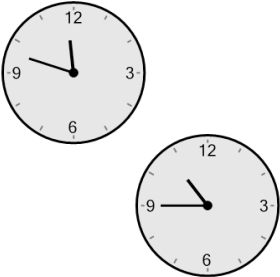



Time - Elapsed Negative - Two Clocks To Hours & Minutes - Quarter Hours

1 How many hours and minutes earlier is the second clock?



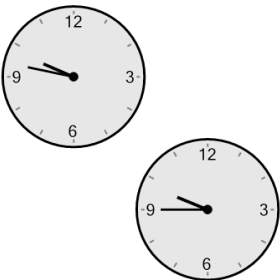
- A 2 hrs 3 mins
- B 2 hrs 18 mins
- C 1 hr 48 mins
- D 48 mins
- E 1 hr 3 mins
- F 12 mins

2 How many hours and minutes earlier is the second clock?




- A 1 hr 33 mins
- B 1 hr 3 mins
- C 2 hrs 18 mins
- D 48 mins
- E 2 hrs 48 mins
- F 18 mins

3 How many hours and minutes earlier is the second clock?



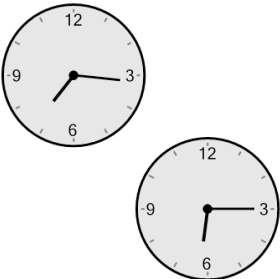
- A 32 mins
- B 13 mins
- C 1 hr 32 mins
- D 58 mins
- E 2 mins
- F 43 mins

4 How many hours and minutes earlier is the second clock?



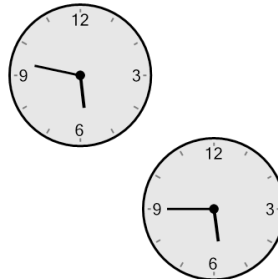
- A 2 hrs 17 mins
- B 43 mins
- C 1 hr 17 mins
- D 2 hrs 2 mins
- E 1 hr 32 mins
- F 1 hr 2 mins

5 How many hours and minutes earlier is the second clock?



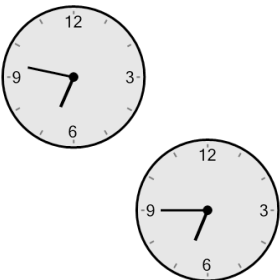
- A 1 hr 16 mins
- B 16 mins
- C 46 mins
- D 1 hr 1 min
- E 31 mins
- F 2 hrs 31 mins

6 How many hours and minutes earlier is the second clock?



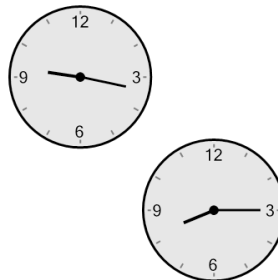
- A 1 hr 17 mins
- B 1 hr 47 mins
- C 2 mins
- D 32 mins
- E 1 hr 43 mins
- F 17 mins

7 How many hours and minutes earlier is the second clock?



- A 2 mins
- B 1 hr 32 mins
- C 43 mins
- D 1 hr 13 mins
- E 17 mins
- F 1 hr 28 mins

8 How many hours and minutes earlier is the second clock?



- A 1 hr 47 mins
- B 1 hr 2 mins
- C 47 mins
- D 2 hrs 32 mins
- E 1 hr 17 mins
- F 2 hrs 2 mins