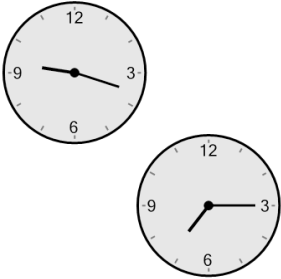


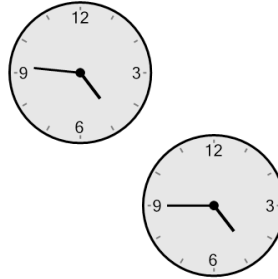
Time - Elapsed Negative - Two Clocks To Hours & Minutes - Quarter Hours

1 How many hours and minutes earlier is the second clock?



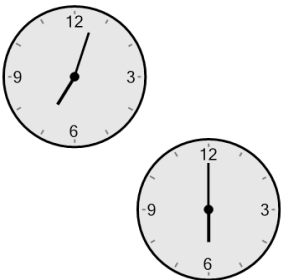
- A 2 hrs 18 mins
- B 2 hrs 3 mins
- C 3 hrs 33 mins
- D 33 mins
- E 2 hrs 33 mins
- F 2 hrs 48 mins

2 How many hours and minutes earlier is the second clock?




- A 16 mins
- B 14 mins
- C 1 hr 29 mins
- D 1 hr 46 mins
- E 44 mins
- F 1 min

3 How many hours and minutes earlier is the second clock?



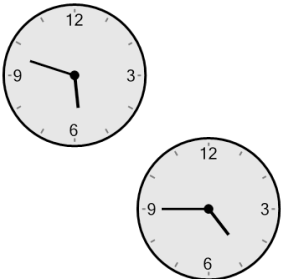
- A 1 hr 48 mins
- B 42 mins
- C 1 hr 33 mins
- D 1 hr 3 mins
- E 3 mins
- F 48 mins

4 How many hours and minutes earlier is the second clock?



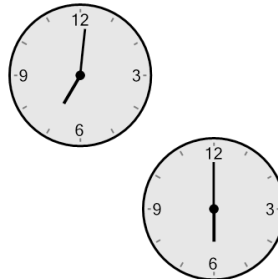
- A 57 mins
- B 27 mins
- C 1 hr 48 mins
- D 3 mins
- E 1 hr 33 mins
- F 18 mins

5 How many hours and minutes earlier is the second clock?



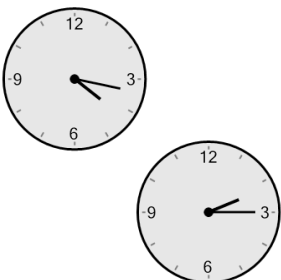
- A 2 hrs 48 mins
- B 2 hrs 33 mins
- C 2 hrs 3 mins
- D 27 mins
- E 33 mins
- F 1 hr 3 mins

6 How many hours and minutes earlier is the second clock?




- A 44 mins
- B 1 hr 1 min
- C 1 min
- D 16 mins
- E 2 hrs 31 mins
- F 2 hrs 1 min

7 How many hours and minutes earlier is the second clock?



- A 2 hrs 2 mins
- B 17 mins
- C 3 hrs 47 mins
- D 47 mins
- E 3 hrs 32 mins
- F 32 mins

8 How many hours and minutes earlier is the second clock?



- A 2 hrs 33 mins
- B 18 mins
- C 3 hrs 48 mins
- D 3 hrs 33 mins
- E 2 hrs 3 mins
- F 1 hr 3 mins