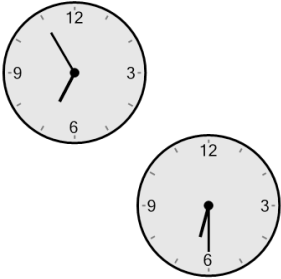



Time - Elapsed Negative - Two Clocks To Minutes - Five Minutes

1 How many minutes earlier is the second clock?



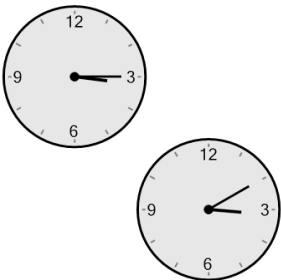
A	50 min	B	5 min
C	35 min	D	65 min
E	25 min	F	100 min

2 How many minutes earlier is the second clock?




A	20 min	B	5 min
C	35 min	D	100 min
E	25 min	F	110 min

3 How many minutes earlier is the second clock?




A	5 min	B	85 min
C	80 min	D	110 min
E	95 min	F	40 min

4 How many minutes earlier is the second clock?




A	10 min	B	25 min
C	5 min	D	115 min
E	50 min	F	70 min

5 How many minutes earlier is the second clock?



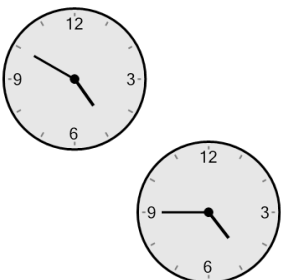
A	25 min	B	40 min
C	10 min	D	55 min
E	95 min	F	65 min

6 How many minutes earlier is the second clock?




A	100 min	B	50 min
C	55 min	D	95 min
E	65 min	F	10 min

7 How many minutes earlier is the second clock?



A	20 min	B	10 min
C	100 min	D	35 min
E	40 min	F	5 min

8 How many minutes earlier is the second clock?



A	35 min	B	70 min
C	10 min	D	55 min
E	5 min	F	95 min