
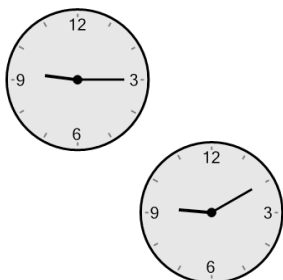




Time - Elapsed Negative - Two Clocks To Minutes - Five Minutes

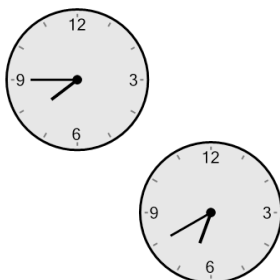


1 How many minutes earlier is the second clock?




- | | |
|-------------|-------------|
| A
40 min | B
20 min |
| C
80 min | D
55 min |
| E
95 min | F
5 min |

2 How many minutes earlier is the second clock?




- | | |
|-------------|-------------|
| A
50 min | B
10 min |
| C
65 min | D
35 min |
| E
95 min | F
40 min |

3 How many minutes earlier is the second clock?



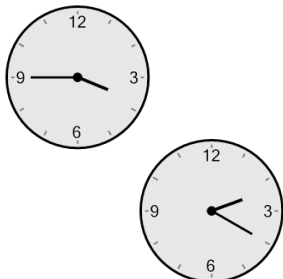
- | | |
|--------------|-------------|
| A
175 min | B
10 min |
| C
115 min | D
70 min |
| E
160 min | F
85 min |

4 How many minutes earlier is the second clock?




- | | |
|--------------|--------------|
| A
155 min | B
170 min |
| C
95 min | D
65 min |
| E
140 min | F
200 min |

5 How many minutes earlier is the second clock?




- | | |
|-------------|--------------|
| A
25 min | B
100 min |
| C
55 min | D
20 min |
| E
10 min | F
85 min |

6 How many minutes earlier is the second clock?



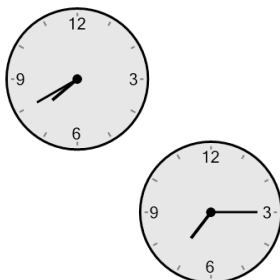
- | | |
|-------------|--------------|
| A
5 min | B
55 min |
| C
20 min | D
35 min |
| E
10 min | F
110 min |

7 How many minutes earlier is the second clock?



- | | |
|-------------|-------------|
| A
30 min | B
60 min |
| C
90 min | D
15 min |
| E
0 min | F
45 min |

8 How many minutes earlier is the second clock?



- | | |
|--------------|-------------|
| A
35 min | B
70 min |
| C
100 min | D
25 min |
| E
115 min | F
55 min |