




Time - Elapsed Negative - Two Clocks To Minutes - Full Hours




1 How many minutes earlier is the second clock?




- | | | | |
|---|---------|---|--------|
| A | 180 min | B | 30 min |
| C | 90 min | D | 15 min |
| E | 60 min | F | 0 min |

2 How many minutes earlier is the second clock?




- | | | | |
|---|---------|---|---------|
| A | 0 min | B | 120 min |
| C | 60 min | D | 240 min |
| E | 150 min | F | 45 min |

3 How many minutes earlier is the second clock?




- | | | | |
|---|---------|---|---------|
| A | 75 min | B | 0 min |
| C | 60 min | D | 165 min |
| E | 240 min | F | 45 min |

4 How many minutes earlier is the second clock?




- | | | | |
|---|---------|---|---------|
| A | 60 min | B | 240 min |
| C | 180 min | D | 0 min |
| E | 15 min | F | 105 min |

5 How many minutes earlier is the second clock?



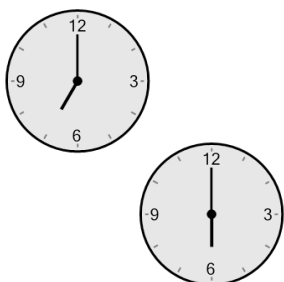
- | | | | |
|---|---------|---|---------|
| A | 15 min | B | 60 min |
| C | 105 min | D | 45 min |
| E | 120 min | F | 240 min |

6 How many minutes earlier is the second clock?



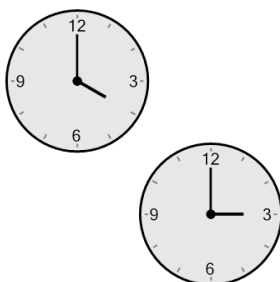
- | | | | |
|---|---------|---|---------|
| A | 120 min | B | 240 min |
| C | 45 min | D | 60 min |
| E | 30 min | F | 180 min |

7 How many minutes earlier is the second clock?



- | | | | |
|---|---------|---|---------|
| A | 60 min | B | 0 min |
| C | 180 min | D | 240 min |
| E | 135 min | F | 150 min |

8 How many minutes earlier is the second clock?



- | | | | |
|---|---------|---|---------|
| A | 75 min | B | 120 min |
| C | 45 min | D | 180 min |
| E | 240 min | F | 60 min |