




## Time - Elapsed Negative - Two Clocks To Minutes - One Minutes




**1** How many minutes earlier is the second clock?




- |              |              |
|--------------|--------------|
| A<br>48 min  | B<br>12 min  |
| C<br>42 min  | D<br>27 min  |
| E<br>132 min | F<br>102 min |

**2** How many minutes earlier is the second clock?




- |             |             |
|-------------|-------------|
| A<br>50 min | B<br>25 min |
| C<br>70 min | D<br>20 min |
| E<br>10 min | F<br>65 min |

**3** How many minutes earlier is the second clock?




- |             |             |
|-------------|-------------|
| A<br>1 min  | B<br>16 min |
| C<br>14 min | D<br>44 min |
| E<br>46 min | F<br>76 min |

**4** How many minutes earlier is the second clock?




- |             |              |
|-------------|--------------|
| A<br>81 min | B<br>69 min  |
| C<br>21 min | D<br>54 min  |
| E<br>6 min  | F<br>111 min |

**5** How many minutes earlier is the second clock?




- |              |              |
|--------------|--------------|
| A<br>50 min  | B<br>115 min |
| C<br>55 min  | D<br>10 min  |
| E<br>100 min | F<br>80 min  |

**6** How many minutes earlier is the second clock?



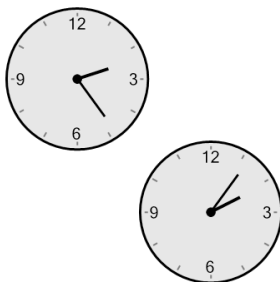
- |             |              |
|-------------|--------------|
| A<br>24 min | B<br>81 min  |
| C<br>6 min  | D<br>54 min  |
| E<br>66 min | F<br>111 min |

**7** How many minutes earlier is the second clock?



- |             |             |
|-------------|-------------|
| A<br>89 min | B<br>91 min |
| C<br>61 min | D<br>44 min |
| E<br>14 min | F<br>16 min |

**8** How many minutes earlier is the second clock?



- |             |             |
|-------------|-------------|
| A<br>3 min  | B<br>18 min |
| C<br>78 min | D<br>42 min |
| E<br>33 min | F<br>12 min |