



Time - Elapsed Negative - Two Clocks To Minutes - One Minutes

1 How many minutes earlier is the second clock?




A	B
15 min	75 min
C	D
90 min	120 min
E	F
60 min	30 min

2 How many minutes earlier is the second clock?




A	B
78 min	183 min
C	D
168 min	18 min
E	F
63 min	12 min

3 How many minutes earlier is the second clock?




A	B
64 min	154 min
C	D
139 min	79 min
E	F
4 min	49 min

4 How many minutes earlier is the second clock?




A	B
64 min	169 min
C	D
19 min	11 min
E	F
26 min	94 min

5 How many minutes earlier is the second clock?




A	B
2 min	77 min
C	D
13 min	182 min
E	F
62 min	152 min

6 How many minutes earlier is the second clock?




A	B
56 min	11 min
C	D
86 min	4 min
E	F
101 min	41 min

7 How many minutes earlier is the second clock?



A	B
112 min	67 min
C	D
22 min	8 min
E	F
23 min	37 min

8 How many minutes earlier is the second clock?



A	B
13 min	2 min
C	D
92 min	103 min
E	F
73 min	88 min