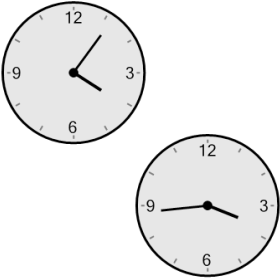



Time - Elapsed Negative - Two Clocks To Minutes - One Minutes

1 How many minutes earlier is the second clock?



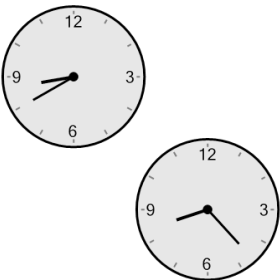
A	8 min	B	22 min
C	82 min	D	127 min
E	38 min	F	83 min

2 How many minutes earlier is the second clock?




A	129 min	B	54 min
C	9 min	D	36 min
E	159 min	F	114 min

3 How many minutes earlier is the second clock?



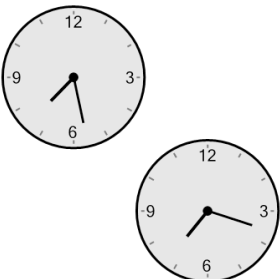
A	62 min	B	88 min
C	77 min	D	92 min
E	13 min	F	17 min

4 How many minutes earlier is the second clock?



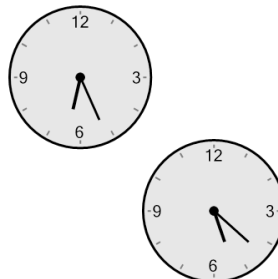
A	25 min	B	40 min
C	80 min	D	50 min
E	10 min	F	85 min

5 How many minutes earlier is the second clock?



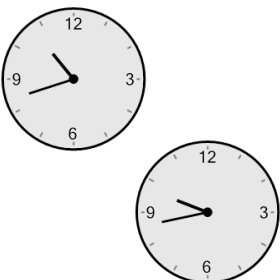
A	10 min	B	20 min
C	50 min	D	55 min
E	95 min	F	65 min

6 How many minutes earlier is the second clock?




A	139 min	B	34 min
C	64 min	D	4 min
E	79 min	F	94 min

7 How many minutes earlier is the second clock?



A	31 min	B	74 min
C	29 min	D	44 min
E	104 min	F	59 min

8 How many minutes earlier is the second clock?



A	67 min	B	52 min
C	8 min	D	23 min
E	113 min	F	82 min