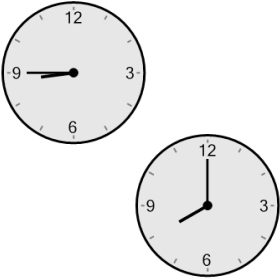




Time - Elapsed Negative - Two Clocks To Minutes - Quarter Hours

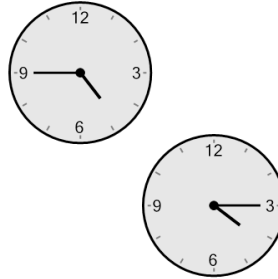


1 How many minutes earlier is the second clock?



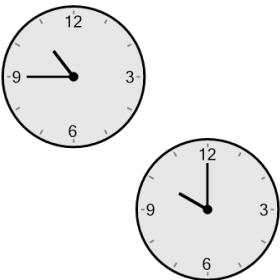
A	60 min	B	105 min
C	15 min	D	90 min
E	30 min	F	45 min

2 How many minutes earlier is the second clock?




A	0 min	B	105 min
C	90 min	D	15 min
E	45 min	F	30 min

3 How many minutes earlier is the second clock?



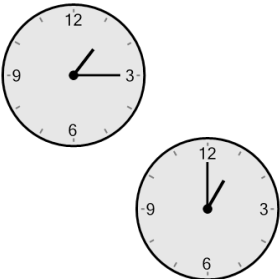
A	60 min	B	45 min
C	15 min	D	150 min
E	120 min	F	30 min

4 How many minutes earlier is the second clock?




A	75 min	B	30 min
C	105 min	D	15 min
E	90 min	F	0 min

5 How many minutes earlier is the second clock?



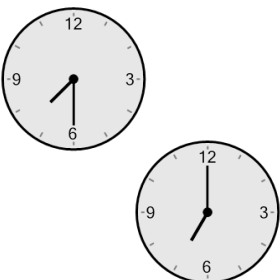
A	30 min	B	120 min
C	15 min	D	90 min
E	45 min	F	60 min

6 How many minutes earlier is the second clock?



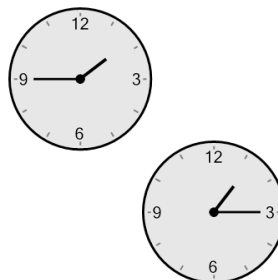
A	15 min	B	45 min
C	120 min	D	75 min
E	30 min	F	0 min

7 How many minutes earlier is the second clock?



A	15 min	B	30 min
C	90 min	D	135 min
E	120 min	F	45 min

8 How many minutes earlier is the second clock?



A	30 min	B	135 min
C	180 min	D	15 min
E	75 min	F	60 min