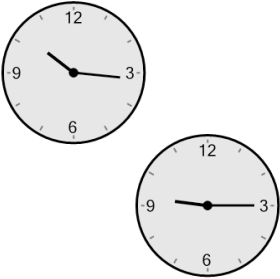



Time - Elapsed Negative - Two Clocks To Minutes - Quarter Hours

1 How many minutes earlier is the second clock?




A	61 min	B	16 min
C	151 min	D	91 min
E	44 min	F	76 min

2 How many minutes earlier is the second clock?




A	72 min	B	33 min
C	3 min	D	57 min
E	87 min	F	18 min

3 How many minutes earlier is the second clock?




A	73 min	B	17 min
C	92 min	D	77 min
E	2 min	F	28 min

4 How many minutes earlier is the second clock?



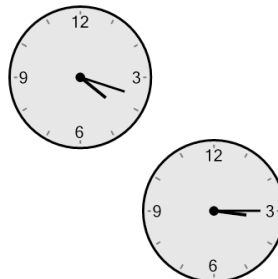
A	107 min	B	2 min
C	73 min	D	92 min
E	43 min	F	103 min

5 How many minutes earlier is the second clock?



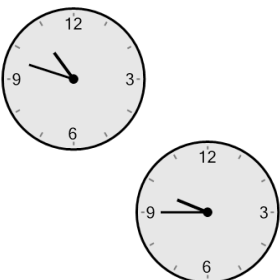
A	72 min	B	18 min
C	12 min	D	78 min
E	102 min	F	3 min

6 How many minutes earlier is the second clock?




A	63 min	B	78 min
C	27 min	D	138 min
E	33 min	F	168 min

7 How many minutes earlier is the second clock?



A	27 min	B	93 min
C	63 min	D	168 min
E	108 min	F	33 min

8 How many minutes earlier is the second clock?



A	59 min	B	1 min
C	74 min	D	89 min
E	46 min	F	29 min