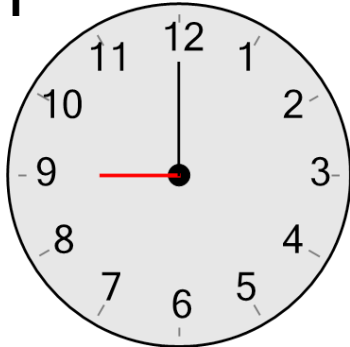




Time - Telling - Hour Hand to Hour - Full Hours



1



What hour is the hour hand (small hand) pointing to?

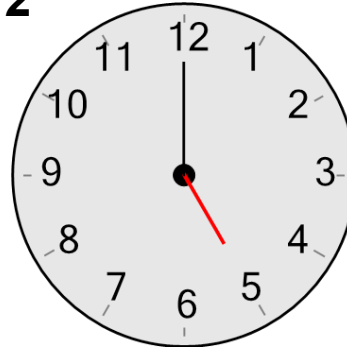
A

5 hours

B

9 hours

2



What hour is the hour hand (small hand) pointing to?

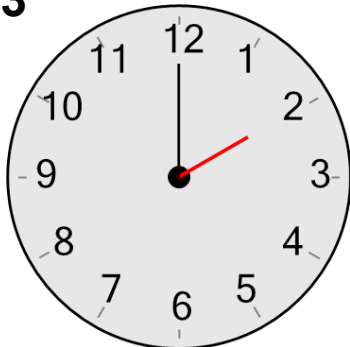
A

9 hours

B

5 hours

3



What hour is the hour hand (small hand) pointing to?

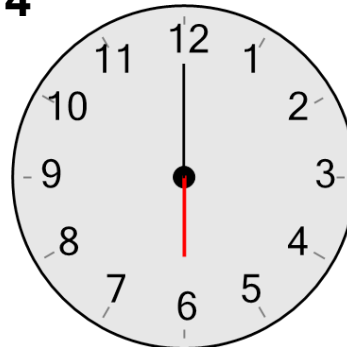
A

10 hours

B

2 hours

4



What hour is the hour hand (small hand) pointing to?

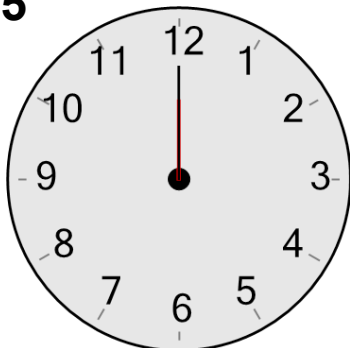
A

3 hours

B

6 hours

5



What hour is the hour hand (small hand) pointing to?

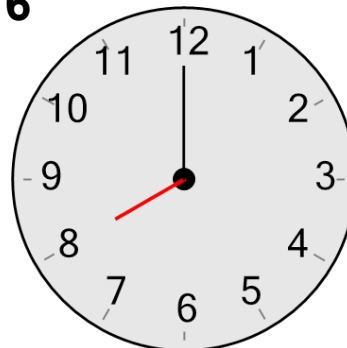
A

12 hours

B

3 hours

6



What hour is the hour hand (small hand) pointing to?

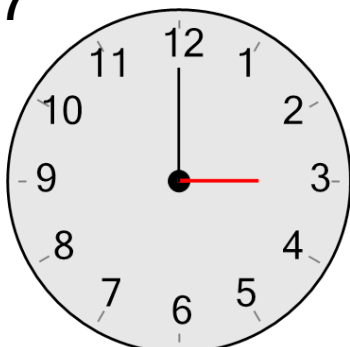
A

10 hours

B

8 hours

7



What hour is the hour hand (small hand) pointing to?

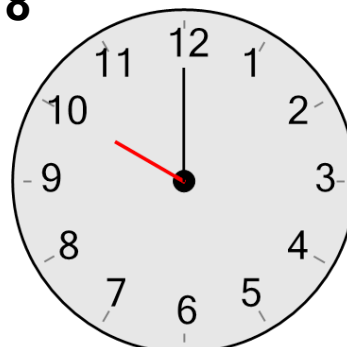
A

3 hours

B

1 hours

8



What hour is the hour hand (small hand) pointing to?

A

10 hours

B

12 hours