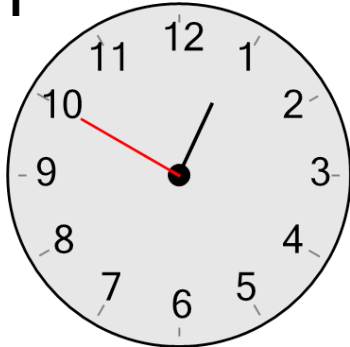


Time - Telling - Minute Hand to Minute - 12 O'Clock

1

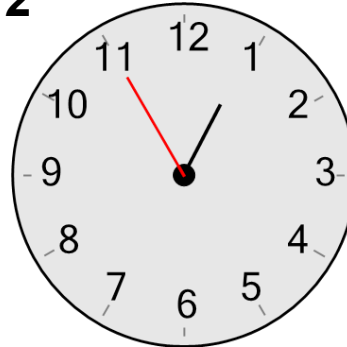
What minute is the minute hand (longer hand) pointing to?

A

50 minutes

B

40 minutes

2

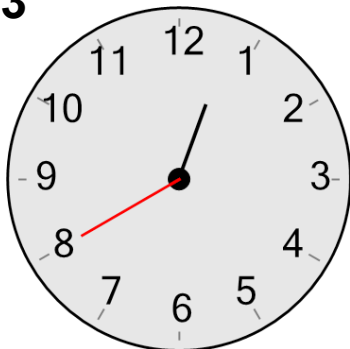
What minute is the minute hand (longer hand) pointing to?

A

55 minutes

B

30 minutes

3

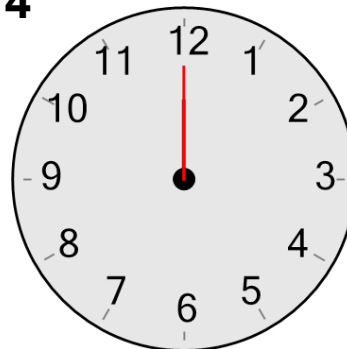
What minute is the minute hand (longer hand) pointing to?

A

40 minutes

B

30 minutes

4

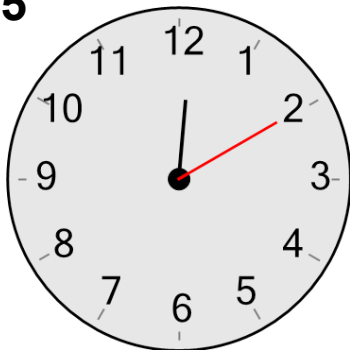
What minute is the minute hand (longer hand) pointing to?

A

0 minutes

B

30 minutes

5

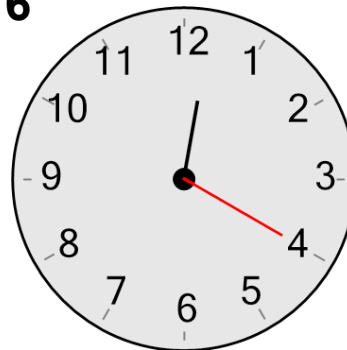
What minute is the minute hand (longer hand) pointing to?

A

20 minutes

B

10 minutes

6

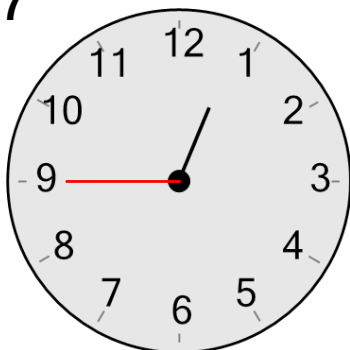
What minute is the minute hand (longer hand) pointing to?

A

20 minutes

B

15 minutes

7

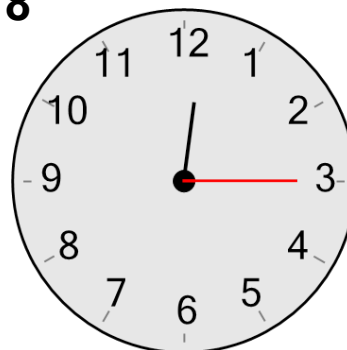
What minute is the minute hand (longer hand) pointing to?

A

20 minutes

B

45 minutes

8

What minute is the minute hand (longer hand) pointing to?

A

15 minutes

B

5 minutes