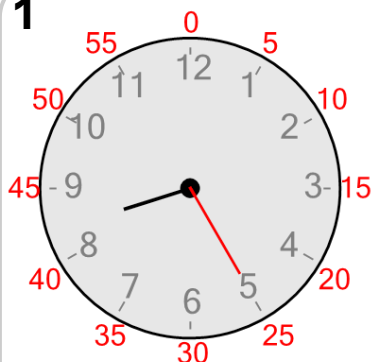




Time - Telling - Minute Hand to Minute (Fives Labelled)

**1**

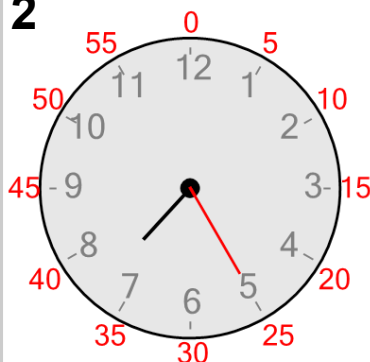
What minute is the minute hand (longer hand) pointing to?

A

40 minutes

B

25 minutes

2

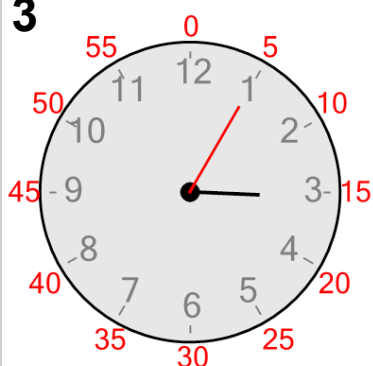
What minute is the minute hand (longer hand) pointing to?

A

30 minutes

B

25 minutes

3

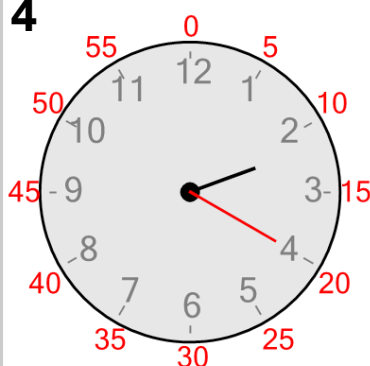
What minute is the minute hand (longer hand) pointing to?

A

25 minutes

B

5 minutes

4

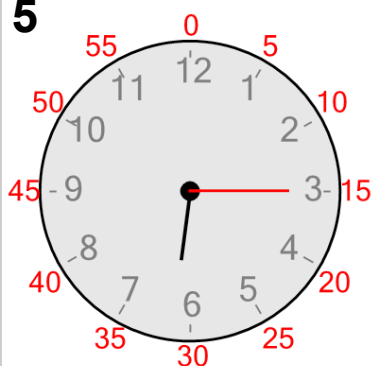
What minute is the minute hand (longer hand) pointing to?

A

20 minutes

B

10 minutes

5

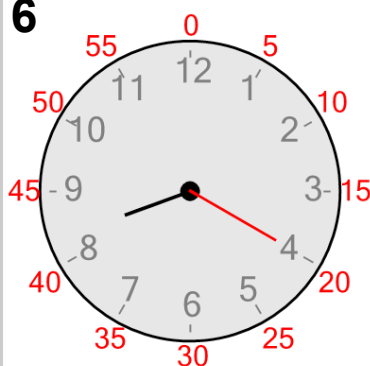
What minute is the minute hand (longer hand) pointing to?

A

15 minutes

B

25 minutes

6

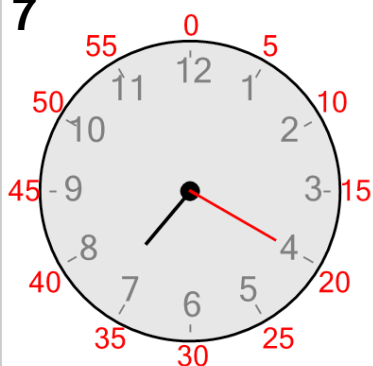
What minute is the minute hand (longer hand) pointing to?

A

10 minutes

B

20 minutes

7

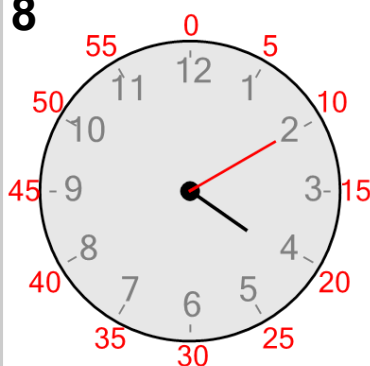
What minute is the minute hand (longer hand) pointing to?

A

20 minutes

B

45 minutes

8

What minute is the minute hand (longer hand) pointing to?

A

25 minutes

B

10 minutes