



## Time - Telling - Minute to Minute Hand (Quarter Hours) (Fives Labelled)

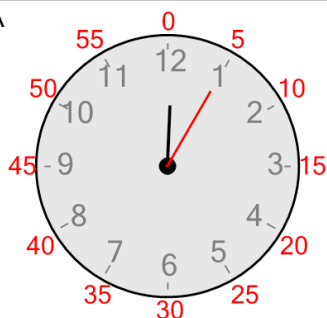


**1**

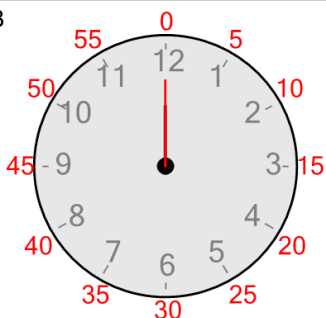
Which clock shows this number of minutes?

0 minutes

A



B

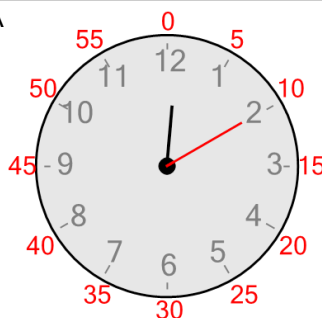


**2**

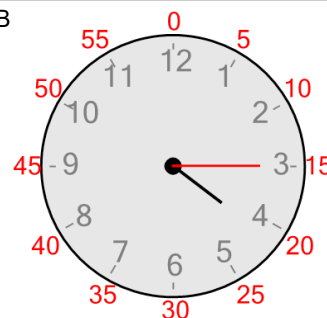
Which clock shows this number of minutes?

15 minutes

A



B

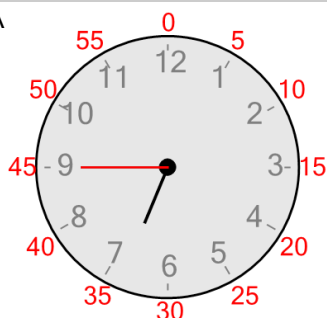


**3**

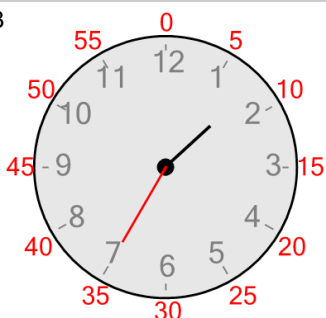
Which clock shows this number of minutes?

45 minutes

A



B




**4**

Which clock shows this number of minutes?

30 minutes

A



B

