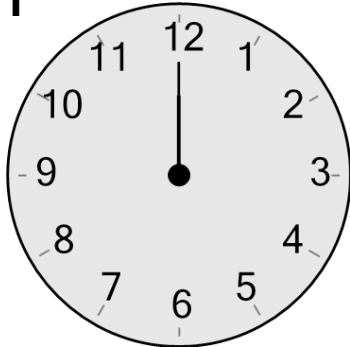




Time - Telling - Clock to Digital - Half Hours

**1**

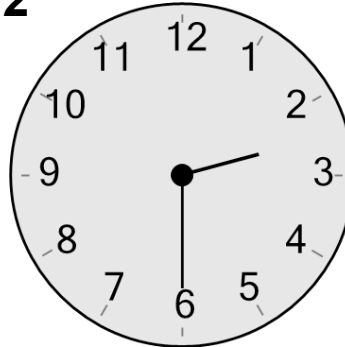
What time is shown on this clock?

A

7:15

B

12:00

2

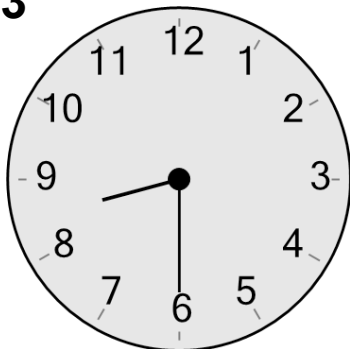
What time is shown on this clock?

A

1:20

B

2:30

3


What time is shown on this clock?

A

8:50

B

8:30

4

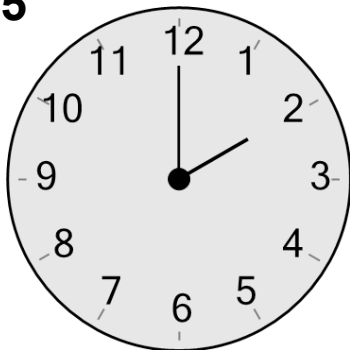
What time is shown on this clock?

A

9:30

B

10:35

5

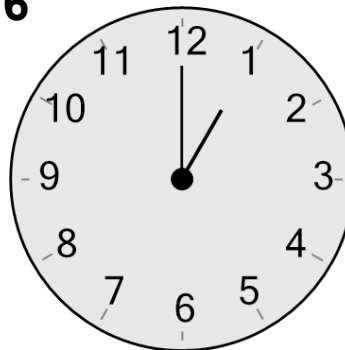
What time is shown on this clock?

A

2:00

B

2:25

6

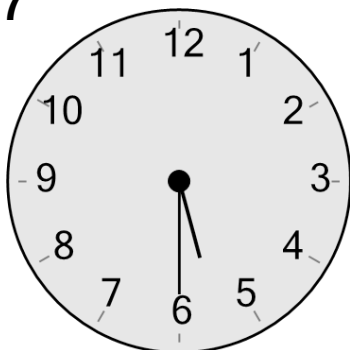
What time is shown on this clock?

A

1:00

B

1:15

7

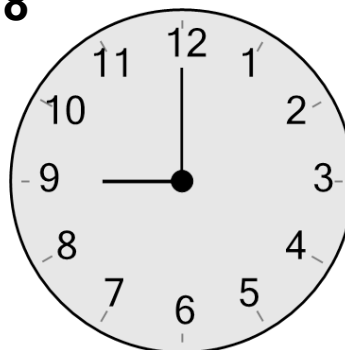
What time is shown on this clock?

A

5:30

B

8:15

8

What time is shown on this clock?

A

4:00

B

9:00