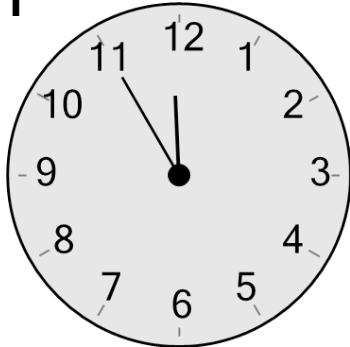


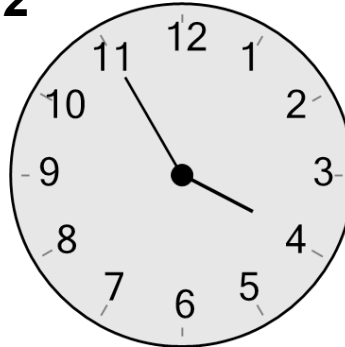


Time - Telling - Clock to Words - Five Minutes

**1**

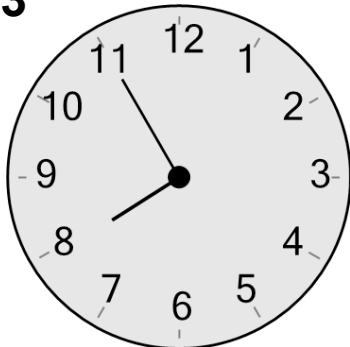
What time is shown on this clock?

- A five to twelve
- B quarter to ten

2


What time is shown on this clock?

- A five to four
- B five to seven

3

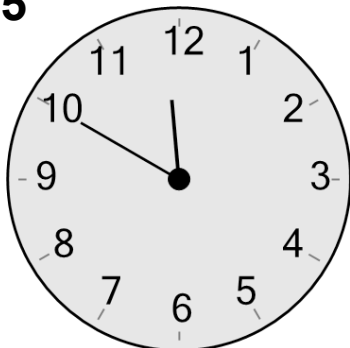
What time is shown on this clock?

- A five to eight
- B twenty-five to twelve

4

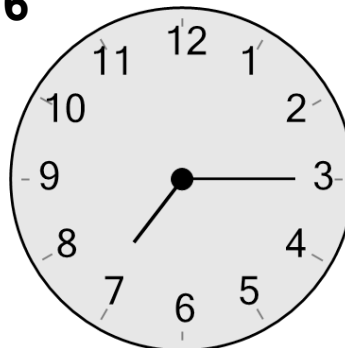
What time is shown on this clock?

- A nine oh five
- B quarter past zero

5

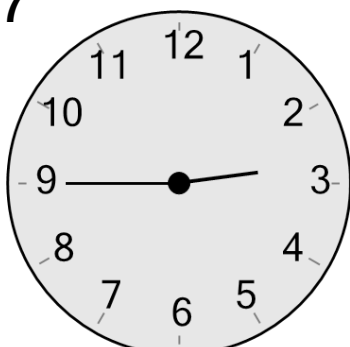
What time is shown on this clock?

- A one minutes to nine
- B ten to twelve

6

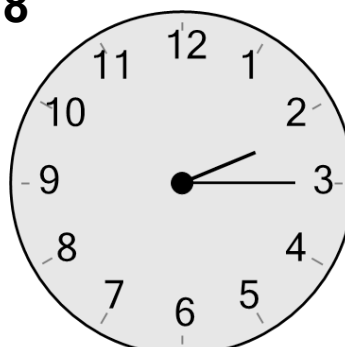
What time is shown on this clock?

- A quarter past seven
- B half past eight

7

What time is shown on this clock?

- A quarter to two
- B quarter to three

8

What time is shown on this clock?

- A quarter past two
- B two twenty-five