





Time - Telling - Clock to Words - One Minutes

1 What time is shown on this clock?




- A four twenty-six
- B twenty-nine minutes to four
- C three oh one
- D one sixteen
- E twenty-nine minutes to two
- F three oh nine

2 What time is shown on this clock?




- A one oh nine
- B five oh four
- C one twenty-four
- D four fourteen
- E twenty-one minutes to five
- F one twenty-nine

3 What time is shown on this clock?




- A fourteen minutes to two
- B twenty-four minutes to five
- C four twenty-six
- D twenty-nine minutes to five
- E nine minutes to four
- F one minutes to two

4 What time is shown on this clock?




- A twenty-one minutes to twelve
- B six minutes to one
- C eleven minutes to one
- D twenty-six minutes to one
- E sixteen minutes to eleven
- F sixteen minutes to one

5 What time is shown on this clock?




- A one minutes to two
- B quarter to two
- C five to two
- D five to three
- E twenty-five to five
- F one minutes to four

6 What time is shown on this clock?




- A eleven minutes to eleven
- B one minutes to one
- C twenty-six minutes to one
- D sixteen minutes to one
- E one minutes to eleven
- F six minutes to one

7 What time is shown on this clock?



- A zero fourteen
- B zero nineteen
- C twenty-one minutes to twelve
- D zero twenty-nine
- E twenty-six minutes to one
- F eight twenty-four

8 What time is shown on this clock?



- A twenty-six minutes to seven
- B eleven minutes to three
- C two twenty-four
- D one minutes to three
- E one minutes to two
- F eleven minutes to two