




Time - Telling - Clock to Words - Quarter Hours




1 What time is shown on this clock?




- A one minutes to six
- B nine twenty-five
- C quarter to six
- D one minutes to three
- E one minutes to four
- F one minutes to two

2 What time is shown on this clock?




- A half past five
- B one ten
- C ten to five
- D twenty-five to three
- E twenty to two
- F quarter to seven

3 What time is shown on this clock?




- A three ten
- B half past two
- C half past three
- D quarter past one
- E four twenty-five
- F one twenty

4 What time is shown on this clock?




- A nine twenty
- B one minutes to nine
- C zero twenty-five
- D one minutes to five
- E quarter to ten
- F one minutes to one

5 What time is shown on this clock?




- A two oh five
- B twenty-five to five
- C quarter past two
- D quarter past four
- E one oh five
- F one ten

6 What time is shown on this clock?




- A quarter past three
- B half past eight
- C quarter past five
- D three ten
- E twenty to ten
- F quarter past seven

7 What time is shown on this clock?



- A half past zero
- B eight twenty
- C twenty-five to ten
- D ten to eleven
- E five to eight
- F quarter to one

8 What time is shown on this clock?



- A eight twenty-five
- B eleven twenty
- C nine twenty-five
- D six ten
- E quarter past zero
- F quarter past ten