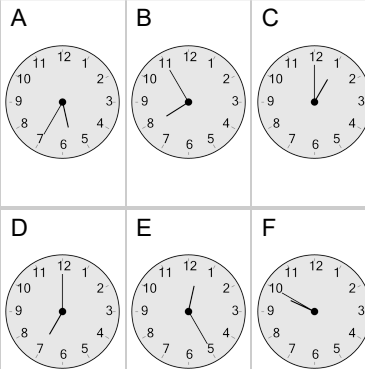




## Time - Telling - Words (Plain) to Clock - Five Minutes

**1** Which clock shows the time indicated

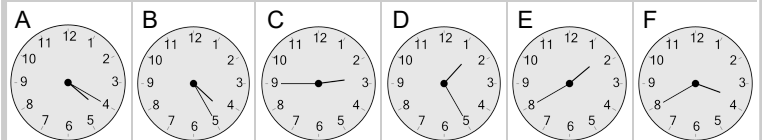
nine fifty



**2**

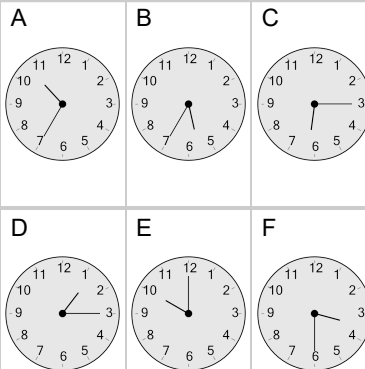
Which clock shows the time indicated

one twenty-five



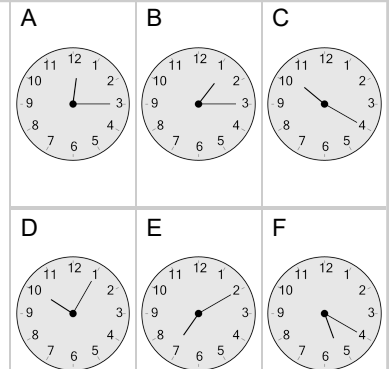
**3** Which clock shows the time indicated

six fifteen



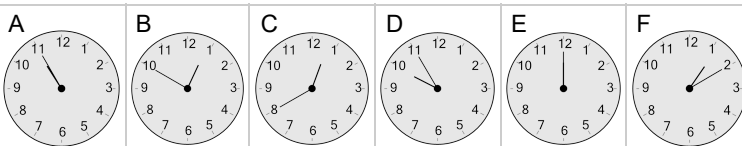
**4** Which clock shows the time indicated

ten oh five



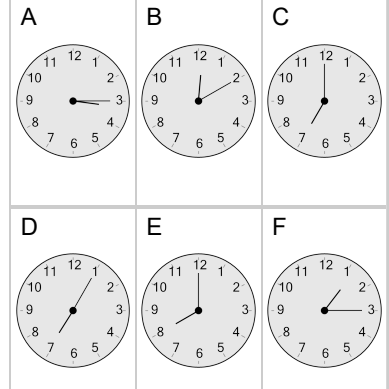
**5** Which clock shows the time indicated

ten fifty-five



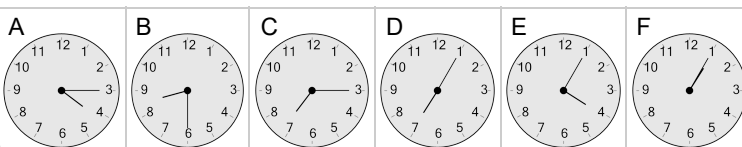
**6** Which clock shows the time indicated

twelve ten



**7** Which clock shows the time indicated

four fifteen



**8** Which clock shows the time indicated

eight thirty

