
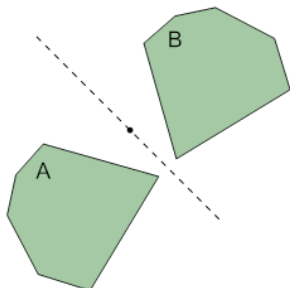


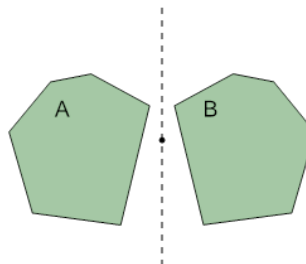


## Transformations - Identify Reflections

**1**

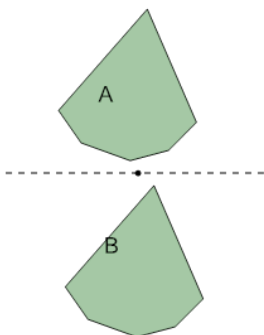
Is the transformation of shape A into shape B a Reflection?

A	Reflection
B	Not a Reflection

**2**

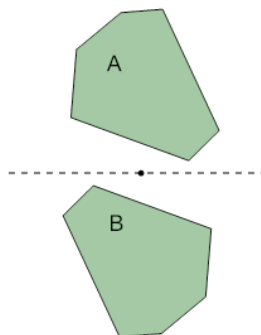
Is the transformation of shape A into shape B a Reflection?

A	Reflection
B	Not a Reflection

**3**

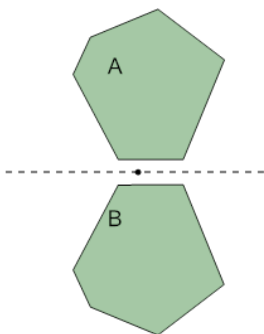
Is the transformation of shape A into shape B a Reflection?

A	Reflection
B	Not a Reflection

**4**

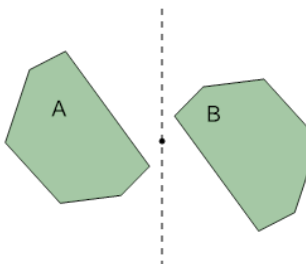
Is the transformation of shape A into shape B a Reflection?

A	Reflection
B	Not a Reflection

**5**

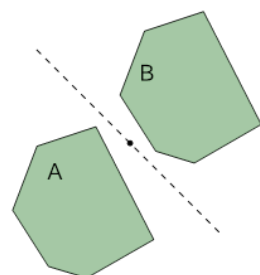
Is the transformation of shape A into shape B a Reflection?

A	Reflection
B	Not a Reflection

**6**

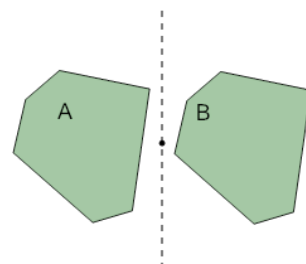
Is the transformation of shape A into shape B a Reflection?

A	Not a Reflection
B	Reflection

**7**

Is the transformation of shape A into shape B a Reflection?

A	Reflection
B	Not a Reflection

**8**

Is the transformation of shape A into shape B a Reflection?

A	Reflection
B	Not a Reflection