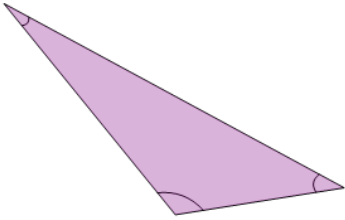




Triangle Classification - Angles - First Time



1



In geometry, what's the name for a triangle where one of the angles is more than 90° ?

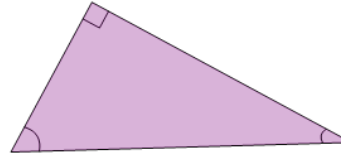
A

Octopus

B

Obtuse

2



In geometry, what's the name for a triangle where one of the angles is equal to 90° ?

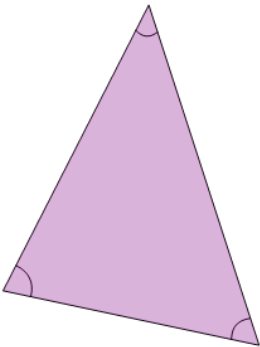
A

Revelry

B

Right

3



In geometry, what's the name for a triangle where all angles are less than 90° ?

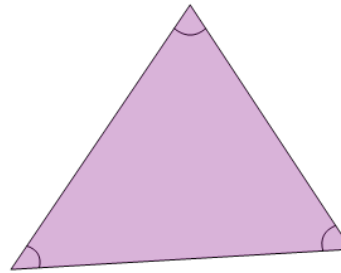
A

Acute

B

Ardvark

4



In geometry, what's the name for a triangle where all angles are less than 90° ?

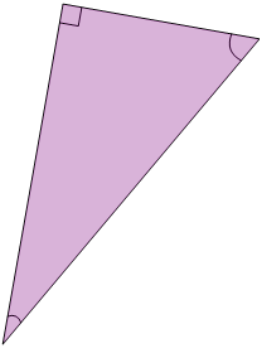
A

Ardvark

B

Acute

5



In geometry, what's the name for a triangle where one of the angles is equal to 90° ?

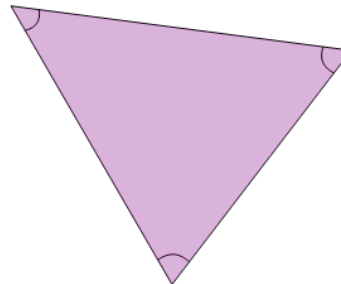
A

Right

B

Rheumatoid

6



In geometry, what's the name for a triangle where all angles are less than 90° ?

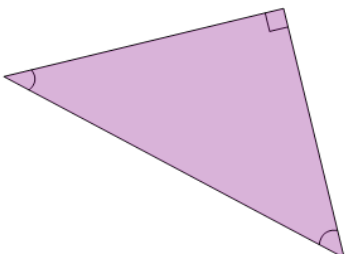
A

Acropolis

B

Acute

7



In geometry, what's the name for a triangle where one of the angles is equal to 90° ?

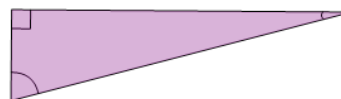
A

Revelry

B

Right

8



In geometry, what's the name for a triangle where one of the angles is equal to 90° ?

A

Resting

B

Right