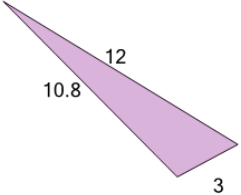




Trigonometry - Heron's Formula - Full Calculation

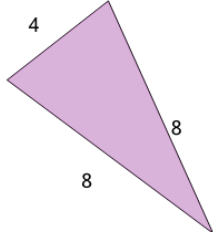


1 Solve for the area of the triangle



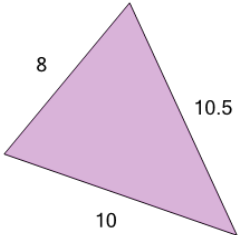
A	B	C
14.8	16.3	17.9
D	E	F
12.4	15.5	17.1

2 Solve for the area of the triangle



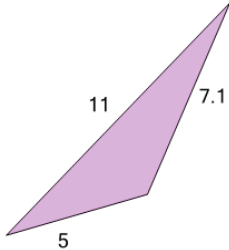
A	B	C
16.3	18.6	15.5
D	E	F
13.2	12.4	11.6

3 Solve for the area of the triangle



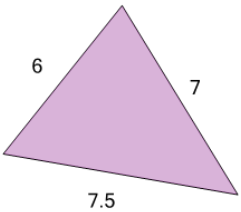
A	B	C
30.1	43.3	37.7
D	E	F
33.9	32	45.2

4 Solve for the area of the triangle



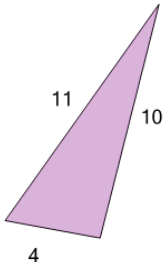
A	B	C
11.6	14.3	15.6
D	E	F
10.9	13.6	16.3

5 Solve for the area of the triangle



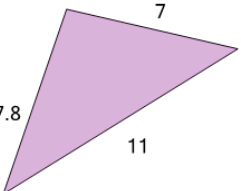
A	B	C
21.7	22.7	14.8
D	E	F
19.7	15.8	18.7

6 Solve for the area of the triangle



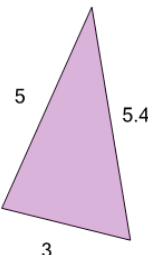
A	B	C
18	24	17
D	E	F
19	21	20

7 Solve for the area of the triangle



A	B	C
27.2	31.2	23.1
D	E	F
28.5	25.8	20.4

8 Solve for the area of the triangle



A	B	C
7.4	8.9	7
D	E	F
8.1	5.9	5.6