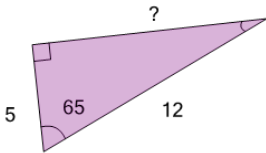




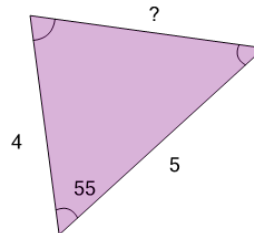
Trigonometry - Rule of Cosines - Full Calculation

1 Solve for the side length indicated



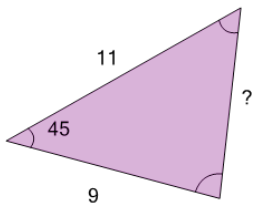
A	B	C
9.2	10.3	10.9
D	E	F
9.8	8.7	12

2 Solve for the side length indicated



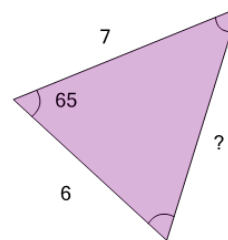
A	B	C
4.5	3.8	4
D	E	F
4.2	5.1	4.7

3 Solve for the side length indicated



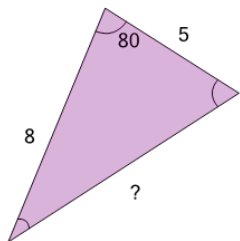
A	B	C
7.9	5.9	7.1
D	E	F
6.3	8.7	8.3

4 Solve for the side length indicated



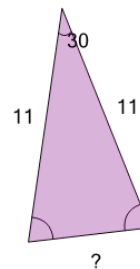
A	B	C
6.3	8.1	7
D	E	F
5.3	8.4	7.4

5 Solve for the side length indicated



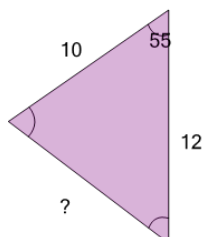
A	B	C
8.7	10	6.5
D	E	F
8.2	6.9	10.4

6 Solve for the side length indicated



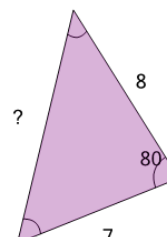
A	B	C
5.7	5.1	6
D	E	F
4.3	4.8	4.6

7 Solve for the side length indicated



A	B	C
12.4	10.3	10.8
D	E	F
9.8	8.2	7.7

8 Solve for the side length indicated



A	B	C
9.2	9.7	8.7
D	E	F
7.7	11.6	11.1