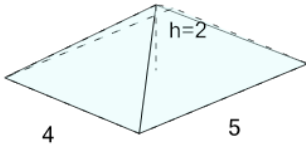
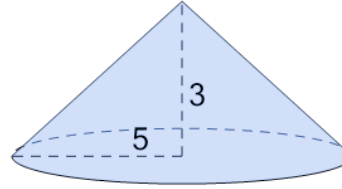
**1**

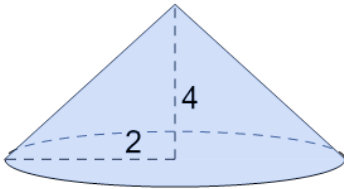
What is the volume of this Rectangular Pyramid?

A	B
13.33	16.33

2

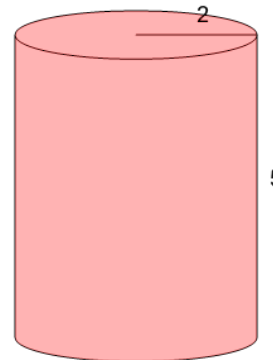
What is the volume of this Cone?

A	B
78.54	81.24

3

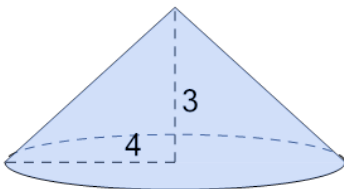
What is the volume of this Cone?

A	B
15.41	16.76

4

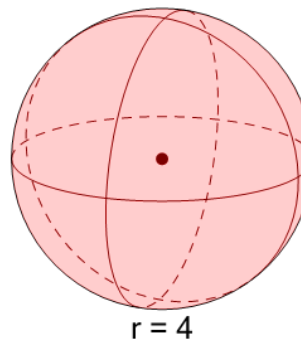
What is the volume of this Cylinder?

A	B
62.83	61.48

5

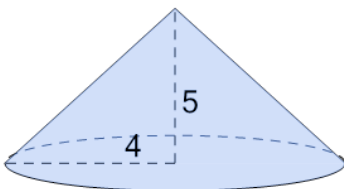
What is the volume of this Cone?

A	B
50.27	48.92

6

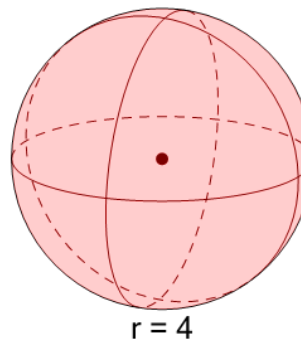
What is the volume of this Sphere?

A	B
264.03	268.08

7

What is the volume of this Cone?

A	B
86.48	83.78

8

What is the volume of this Sphere?

A	B
268.08	264.03