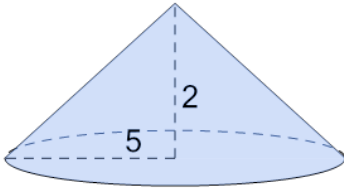
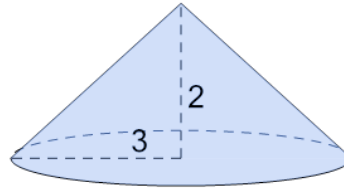


**1**

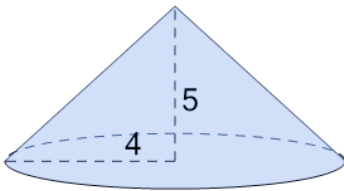
What is the volume of this Cone?

A	B
52.36	56.41

2

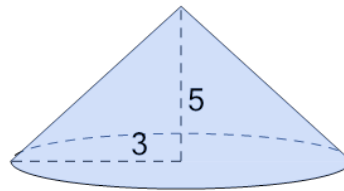
What is the volume of this Cone?

A	B
16.15	18.85

3

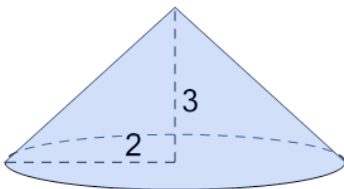
What is the volume of this Cone?

A	B
83.78	85.13

4

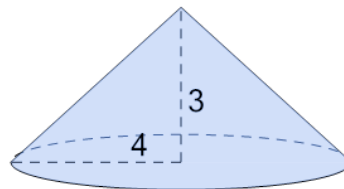
What is the volume of this Cone?

A	B
43.07	47.12

5

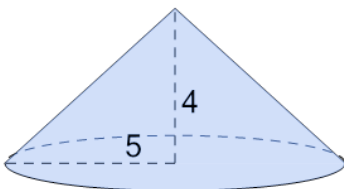
What is the volume of this Cone?

A	B
12.57	8.52

6

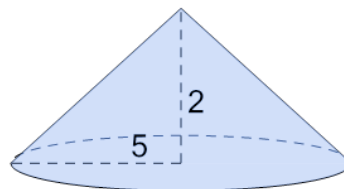
What is the volume of this Cone?

A	B
54.32	50.27

7

What is the volume of this Cone?

A	B
108.77	104.72

8

What is the volume of this Cone?

A	B
49.66	52.36