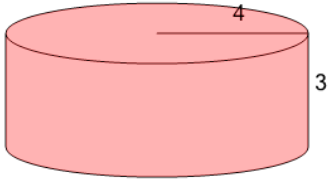
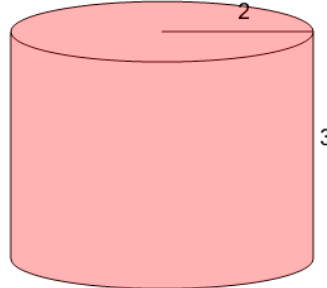
**1**

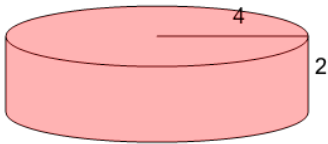
What is the volume of this Cylinder?

A	B
152.15	150.8

**2**

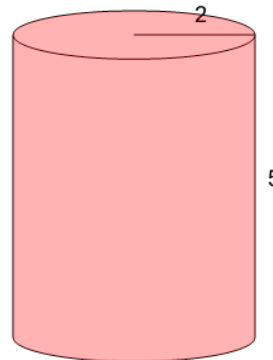
What is the volume of this Cylinder?

A	B
37.7	33.65

**3**

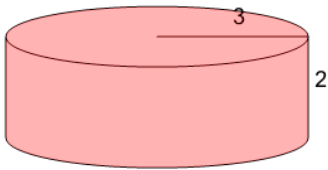
What is the volume of this Cylinder?

A	B
99.18	100.53

**4**

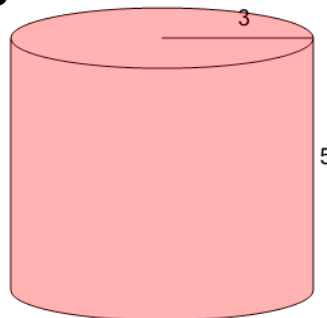
What is the volume of this Cylinder?

A	B
66.88	62.83

**5**

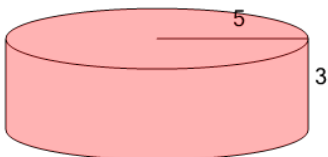
What is the volume of this Cylinder?

A	B
55.2	56.55

**6**

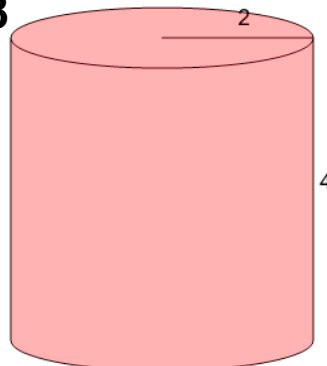
What is the volume of this Cylinder?

A	B
141.37	137.32

**7**

What is the volume of this Cylinder?

A	B
235.62	231.57

**8**

What is the volume of this Cylinder?

A	B
47.57	50.27