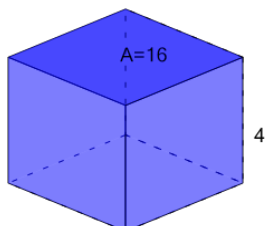




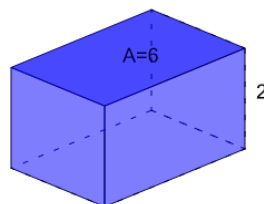
Volume of a Rectangular Prism - Calculate from Base Area

1 What is the volume of this Cube?



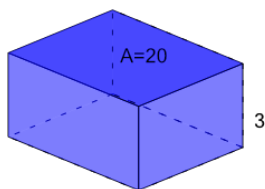
A	B	C
58	82	94
D	E	F
64	16	112

2 What is the volume of this Rectangular Prism?



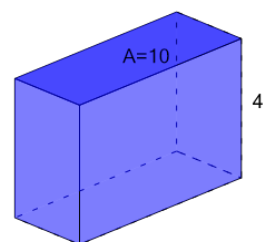
A	B	C
16	9	8
D	E	F
12	18	3

3 What is the volume of this Rectangular Prism?



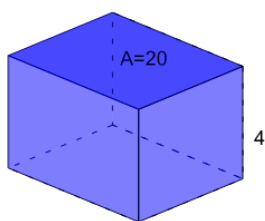
A	B	C
18	36	6
D	E	F
60	12	114

4 What is the volume of this Rectangular Prism?



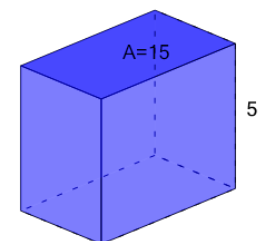
A	B	C
28	44	48
D	E	F
40	8	52

5 What is the volume of this Rectangular Prism?



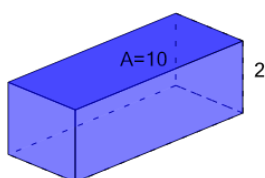
A	B	C
32	16	80
D	E	F
72	48	144

6 What is the volume of this Rectangular Prism?



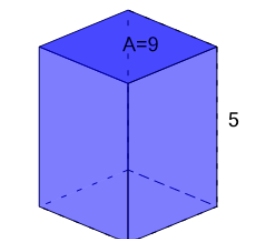
A	B	C
138	33	61
D	E	F
68	75	124

7 What is the volume of this Rectangular Prism?



A	B	C
22	4	8
D	E	F
16	20	2

8 What is the volume of this Rectangular Prism?



A	B	C
33	21	17
D	E	F
45	41	37