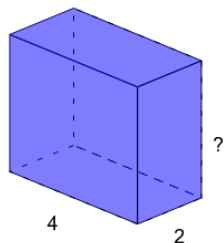




Volume of a Rectangular Prism - Calculate Side from Volume and Sides

1

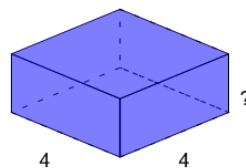
What is the length of the missing side of this Rectangular Prism?

 $V=32$

A	B	C
1	4	5
D	E	F
13	11	2

2

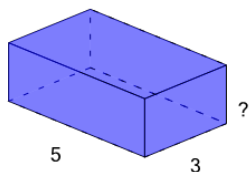
What is the length of the missing side of this Rectangular Prism?

 $V=32$

A	B	C
10	8	3
D	E	F
11	7	2

3

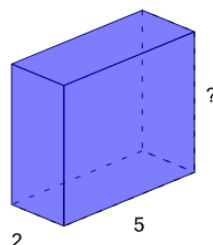
What is the length of the missing side of this Rectangular Prism?

 $V=30$

A	B	C
2	11	7
D	E	F
10	1	3

4

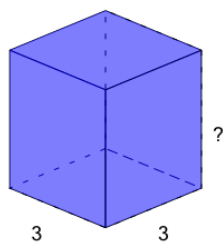
What is the length of the missing side of this Rectangular Prism?

 $V=50$

A	B	C
9	2	13
D	E	F
11	3	5

5

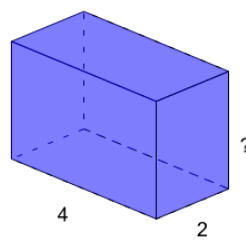
What is the length of the missing side of this Rectangular Prism?

 $V=36$

A	B	C
1	12	7
D	E	F
4	3	8

6

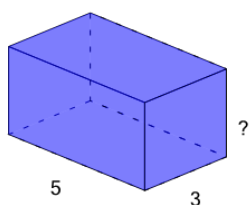
What is the length of the missing side of this Rectangular Prism?

 $V=24$

A	B	C
6	7	3
D	E	F
4	10	12

7

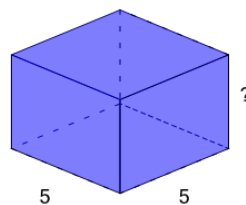
What is the length of the missing side of this Rectangular Prism?

 $V=45$

A	B	C
1	9	10
D	E	F
5	3	2

8

What is the length of the missing side of this Rectangular Prism?

 $V=100$

A	B	C
8	9	1
D	E	F
4	12	6