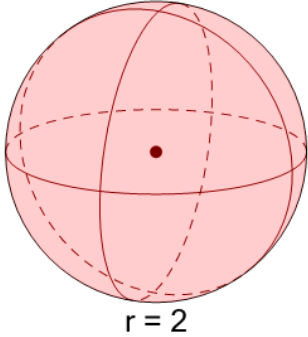
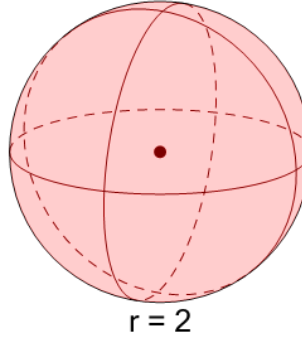
**1** $r = 2$

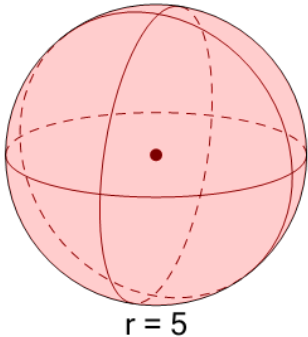
What is the volume of this Sphere?

A	B
36.21	33.51

2 $r = 2$

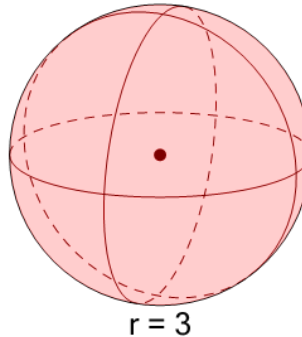
What is the volume of this Sphere?

A	B
33.51	36.21

3 $r = 5$

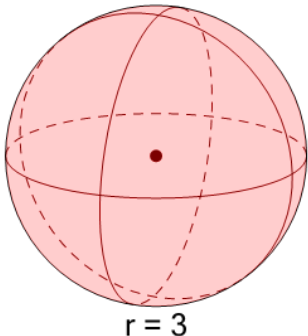
What is the volume of this Sphere?

A	B
520.9	523.6

4 $r = 3$

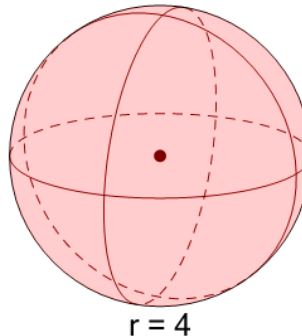
What is the volume of this Sphere?

A	B
109.05	113.1

5 $r = 3$

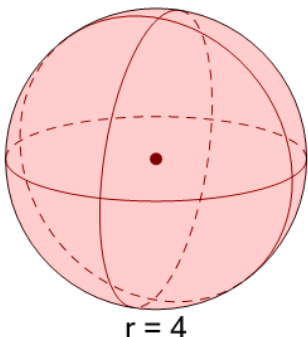
What is the volume of this Sphere?

A	B
110.4	113.1

6 $r = 4$

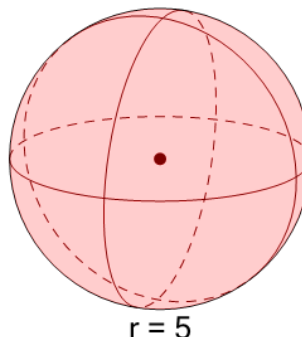
What is the volume of this Sphere?

A	B
266.73	268.08

7 $r = 4$

What is the volume of this Sphere?

A	B
268.08	269.43

8 $r = 5$

What is the volume of this Sphere?

A	B
526.3	523.6