

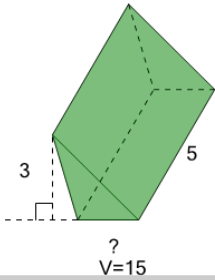


## Volume of a Triangular Prism (Non-Right) - Calculate Triangle Side from Volume

### and Sides

**1**

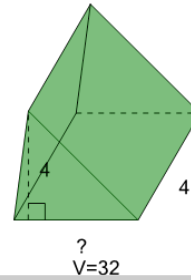
What is the length of the missing side of this Triangular Prism?



A	B	C
4	2	7
D	E	F
1	11	8

**2**

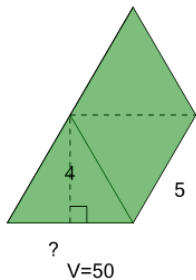
What is the length of the missing side of this Triangular Prism?



A	B	C
5	2	13
D	E	F
6	9	4

**3**

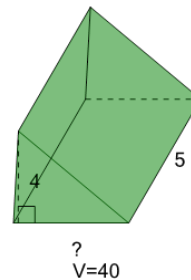
What is the length of the missing side of this Triangular Prism?



A	B	C
9	5	4
D	E	F
2	3	10

**4**

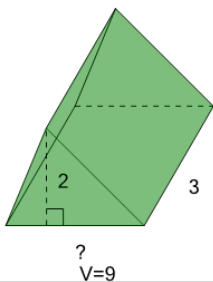
What is the length of the missing side of this Triangular Prism?



A	B	C
10	4	6
D	E	F
1	2	13

**5**

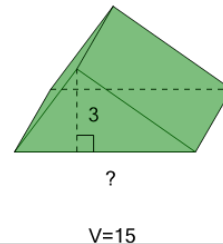
What is the length of the missing side of this Triangular Prism?



A	B	C
3	5	10
D	E	F
4	6	11

**6**

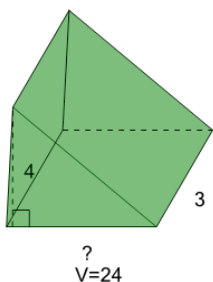
What is the length of the missing side of this Triangular Prism?



A	B	C
10	9	5
D	E	F
2	3	6

**7**

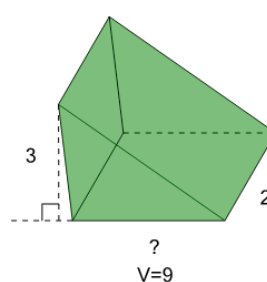
What is the length of the missing side of this Triangular Prism?



A	B	C
2	6	8
D	E	F
1	7	4

**8**

What is the length of the missing side of this Triangular Prism?



A	B	C
5	3	6
D	E	F
1	4	11